


Name: \_\_\_\_\_



# Addition — Picture Sums Within 10

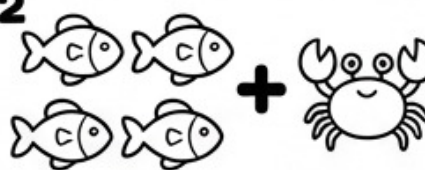
Count the pictures. Write the addition sentence.

1


$$\square + \square = \square$$


\_\_\_\_\_ + \_\_\_\_\_ = \_\_\_\_\_

2


$$\square + \square = \square$$


\_\_\_\_\_ + \_\_\_\_\_ = \_\_\_\_\_

3


$$\square + \square = \square$$

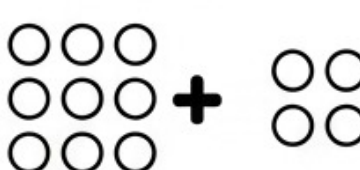
\_\_\_\_\_ + \_\_\_\_\_ = \_\_\_\_\_

4


$$\square + \square = \square$$


\_\_\_\_\_ + \_\_\_\_\_ = \_\_\_\_\_

5


$$\square + \square = \square$$


\_\_\_\_\_ + \_\_\_\_\_ = \_\_\_\_\_

6


$$\square + \square = \square$$


\_\_\_\_\_ + \_\_\_\_\_ = \_\_\_\_\_

7


$$\square + \square = \square$$

\_\_\_\_\_ + \_\_\_\_\_ = \_\_\_\_\_

8


$$\square + \square = \square$$

\_\_\_\_\_ + \_\_\_\_\_ = \_\_\_\_\_

